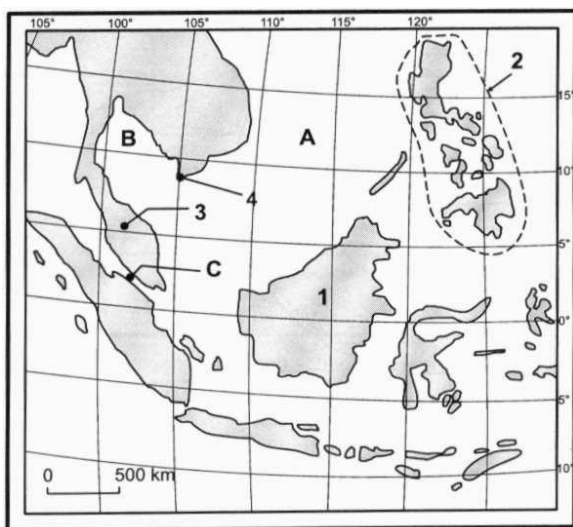


ROZPOZNAJĘ OBIEKTY GEOGRAFICZNE NA MAPIE

Zadanie 1

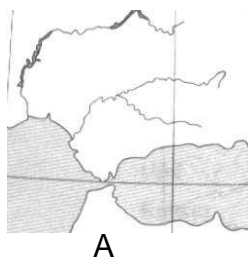
Rozpoznaj zaznaczone na mapie obiekty geograficzne.



Zadanie 2

Rozpoznaj kontury:

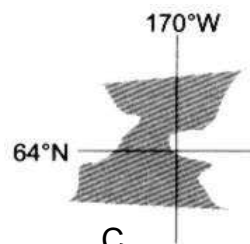
a) cieśnin:



A

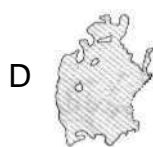


B



C

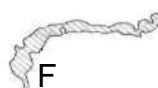
b) jezior:



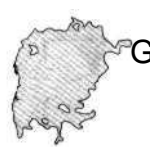
D



E



F




G

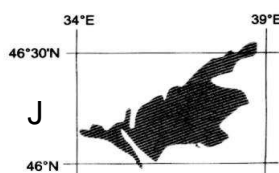


H

c) mórz:

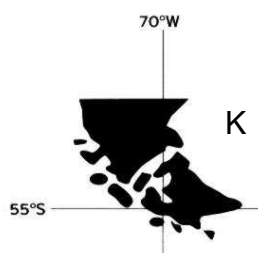


I



J

d) wyspy



K